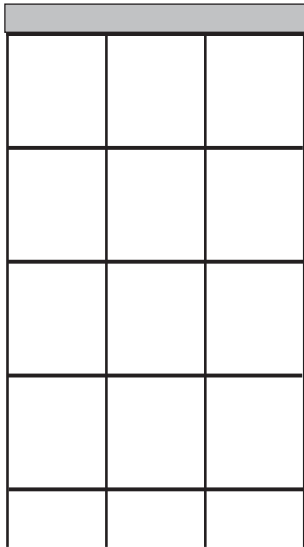


# Ukulele chords

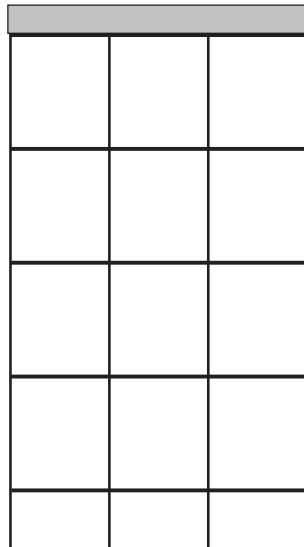
Name: \_\_\_\_\_

Using coloured pencils or pens, draw in the finger dots for each of the following ukulele chord diagrams:

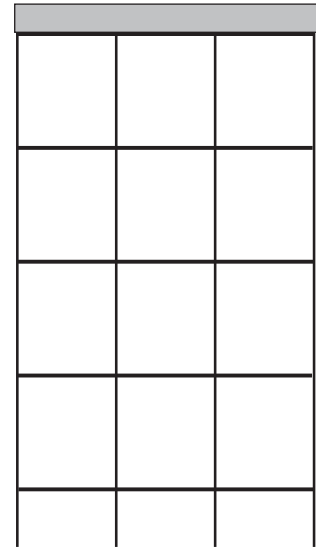
## C



## C7



## F



Multiple choice quiz:

### What is a chord?

- A. Lots of notes played really fast.
- B. Two or more notes of different pitch played together.
- C. Something guitarists and ukulele players use to look cool.
- D. All of the notes of a song.

### What is a time signature?

- A. The numbers at the start of a piece of music that tells us how many beats are in a bar.
- B. Something that rock stars do to sign lots of autographs for their fans quickly.
- C. Something that tells us what chord to play.
- D. Something that tells us how fast to play.

### What are correct names for different types of chords?

- A. Major chords
- B. Minor chords
- C. Diminished chords
- D. Seventh chords
- E. All of the above